




とけいのはりをみて なんじなんぶんか それぞれこたえましょう。




こたえ



こたえ




こたえ




こたえ


■■■■家庭学習でご利用の場合のみ無償でご利用頂けます。それ以外是有償となりますのでご注意ください。■■■■




こたえ



こたえ




こたえ




こたえ


とけいのはりをみて なんじなんぷんか それぞれこたえましょう。




こたえ
3じ



こたえ
3じ30ぷん




こたえ
6じ




こたえ
8じ30ぷん


■■■■家庭学習でご利用の場合のみ無償でご利用頂けます。それ以外是有償となりますのでご注意ください。■■■■




こたえ
11じ30ぷん



こたえ
2じ



こたえ
5じ



こたえ
1じ30ぷん