




えんぴつを ぜんぶあわせてると なんぼんになるでしょう？




+




こたえ




+



こたえ



+



こたえ


■■■■家庭学習でご利用の場合のみ無償でご利用頂けます。それ以外是有償となりますのでご注意ください。■■■■




+



こたえ



+



こたえ




+




こたえ


えんぴつを ぜんぶあわせてると なんぼんになるでしょう？




+




こたえ 46ほん




+



こたえ 39ほん



+



こたえ 57ほん


■■■■家庭学習でご利用の場合のみ無償でご利用頂けます。それ以外是有償となりますのでご注意ください。■■■■




+



こたえ 24ほん



+



こたえ 37ほん



+



こたえ 45ほん